

Worksheet 1

A. Answer these questions.

1. What do you understand by the term mammals?


2. How do birds reproduce?

3. What is albumen?

4. Name the various stages in the life cycle of a frog.

5. What is moulting?

B. Draw the internal structure of an egg and label its parts.



Teacher's Signature: _____

Remarks: _____

Worksheet 2

A. Rearrange the words to form meaningful words related to animals.

1. FLYBUTTER _____
2. PILLARCATER _____
3. SALISCHRY _____
4. POLETAD _____
5. MALSMAM _____

B. Fill in the blanks.

1. A baby frog is called a _____.
2. The yellow part inside an egg is _____.
3. Pupa is also known as _____.
4. The baby insect that comes out of the egg is called a _____.
5. Fishes reproduce by laying _____.
6. The larva of a _____ is called a caterpillar.
7. The _____ of skin of a caterpillar is called moulting.
8. After undergoing moulting several times, a nymph grows into an _____.

C. Circle the odd one out.

1. bird fish dog butterfly
2. eggshell albumen yolk metamorphosis
3. caterpillar nymph pupa cocoon

Teacher's Signature: _____

Remarks: _____

Worksheet 1

A. Match the following.

- | | |
|-----------------------|---------------|
| 1. terrestrial animal | a. salamander |
| 2. aquatic animal | b. bat |
| 3. amphibian | c. squirrel |
| 4. aerial animal | d. crab |
| 5. arboreal animal | e. horse |

B. Fill in the blanks.

1. Animals, such as fish and houseflies, show _____ for their protection.
2. Cuttlefish and stick insect change _____ for their protection.
3. Frogs and dormice _____ to protect them from the extremely cold climatic conditions.
4. Earthworms undergo _____ during summers.
5. Porcupines have _____ to prevent itself from the attacker.
6. Spiders and snakes protect themselves with their _____ bite.
7. Turtles and tortoises have a tough and _____ shell over their body.

Teacher's Signature: _____

Remarks: _____

Worksheet 2

Answer the following.

1. What are arboreal animals? Give some examples.

2. How is a frog adapted to live on land and in water?

3. What are spines? Which animal uses spines for their protection?

4. What do you mean by hibernation? Name two animals that hibernate.

5. Define aestivation.

6. What is the meaning of the term 'camouflage'?

Teacher's Signature: _____

Remarks: _____

Worksheet 1

A. Tick (✓) the correct options.

1. We live on a planet called

- a. Earth. b. Mars. c. Jupiter.

2. The Sun and eight planets moving around it form the

- a. stars. b. constellation. c. solar system.

3. Ursa Major and Taurus are the examples of

- a. planets. b. satellites. c. constellations.

B. Name the following.

- 1. Star patterns in the sky _____
- 2. A planet with one Moon _____
- 3. A planet with more than 60 Moons _____
- 4. A planet with 62 Moons _____
- 5. A planet with 27 Moons _____
- 6. A planet with 14 Moons _____
- 7. The natural satellite of the Earth _____
- 8. A huge ball of fire and light. _____
- 9. He was an Indian astronomer who studied about planetary motion _____

Teacher's Signature: _____

Remarks: _____

Worksheet 2

A. Write short answers.

1. What is the study of heavenly bodies known as?

2. Which is the farthest planet from the Sun?

B. Answer these questions.

1. What is the difference between a star and a planet?

2. What is a solar system made up of?

3. What is a satellite? Write the name of the natural satellite of the Earth.

4. What do you mean by constellation?

5. Mention the contribution of Aryabhata in the field of astronomy.

Teacher's Signature: _____

Remarks: _____

Worksheet 1

A. Circle the odd one out.

- | | | |
|--------------|--------|----------|
| 1. Pine | Deodar | Maple |
| 2. Sunflower | Aster | Magnolia |
| 3. Cactus | Agave | Mosses |
| 4. Horsetail | Lupine | Cedar |
| 5. Lupine | Mosses | Ferns |

B. Some fauna of India are given in the box. Search and circle them in wordsearch.

Bison Deer Elk Whales Walrus

W	H	A	L	E	S	Z	X	C	V
A	S	D	F	G	H	D	E	E	R
L	B	I	S	O	N	T	Y	L	U
R	B	N	M	L	K	J	H	K	R
U	K	L	H	G	F	D	E	R	Y
S	B	V	C	X	Z	N	M	K	U
E	A	S	D	F	E	W	E	R	Q



Teacher's Signature: _____

Remarks: _____



Worksheet 2

Answer the following in thoughts cloud.



1. Name two animals that are found in mountains



2. Name two animals that are found in plains



3. Name two animals that are found in Indian Waters



4. Name two animals that are found in Thar



Teacher's Signature: _____

Remarks: _____