

Worksheet 1

A. Find and circle the words related to early humans in the wordsearch.

Z	I	X	V	I	A	N	K	C	T
P	T	W	S	E	P	Q	N	F	S
E	V	O	L	U	T	I	O	N	K
L	W	G	E	A	D	F	V	I	W
A	X	B	D	O	Z	X	B	O	E
N	N	Y	G	D	E	F	P	A	A
F	I	R	E	A	R	C	T	I	P
I	D	Z	S	W	H	D	P	D	O
Q	A	X	O	I	V	N	M	V	N
F	A	R	M	I	N	G	T	V	S

EVOLUTION
SLEDGES
WEAPONS
FARMING
FIRE

B. The underlined words are incorrect. Rewrite the sentence in your notebook using the correct words.

1. Humans have remained the same over time.
2. Early humans ate fruits, roots, nuts and pastry
3. Early humans used glass of different sizes to make tools.
4. Early humans discovered that food could be made by rubbing two stones together.
5. Early humans discovered the wheel.

C. Fill in the blanks. Choose words from the box.

evolution hunted tools discovered back

1. The process of change over a period of time is called _____.
2. Early humans _____ small animals.
3. Stone _____ were used for cutting and making things.
4. Early humans _____ fire.
5. Early humans carried loads on their _____.

Teacher's Signature: _____


Remarks: _____

Worksheet 2

A. Write true or false.

1. Early humans did not know how to cook food.
2. Early humans hunted fruits.
3. Early humans used weapons for painting.
4. Early humans lit fire to stay warm.
5. Early humans started farming.

B. Look at the picture. Answer the following questions.



1. Name the discovery of early humans.

2. Write any two uses of it by early humans.

C. Fill in the blanks.

1. Early humans used animals and _____ to carry loads.
2. Early humans learnt that _____ made it easier and faster to carry loads.
3. Early humans noticed that the seeds of the wild fruits they ate and threw grew into new _____.
4. _____ cities is a feature of civilizations.
5. Humans evolved from _____.

Teacher's Signature: _____

Remarks: _____

A. Fill in the blanks. Choose words from the brackets.

1. The Earth is enclosed by an atmosphere, a layer of _____. (air/water)
2. The Earth is _____ in shape. (flat/round)
3. The _____ is a model used to study the Earth. (globe/map)
4. The compass has a needle that always points to the _____. (north/south)
5. India is in _____. (Asia/Europe)
6. _____ are very large bodies of water. (Lakes/Oceans)

B. Write one-word answers.

1. The Earth constitutes this ratio of water. _____
2. The Earth's shape resembles this fruit. _____
3. This is a drawing of the Earth or a part of it. _____
4. This instrument was used by sailors to find directions. _____
5. These are large areas of land. _____
6. This is the largest continent. _____

C. Find the odd one out in each set.

- | | | |
|------------------|----------------|------------|
| 1. land | air | rocket |
| 2. globe | compass | map |
| 3. north | east | Asia |
| 4. Australia | Antarctica | New Delhi |
| 5. Pacific Ocean | Atlantic Ocean | River Nile |
| 6. horizon | land | water |

Teacher's Signature: _____

Remarks: _____

Worksheet 2

A. Find the names of the five oceans in the word search.

V	I	N	D	I	A	N	K	C	P
A	T	W	D	E	P	Q	N	F	A
T	S	U	I	C	A	E	R	Y	C
L	W	G	S	A	D	F	V	I	I
A	X	B	T	O	Z	X	B	O	F
N	N	Y	C	D	F	N	P	A	I
T	B	C	S	A	R	C	T	I	C
I	D	Z	Q	W	H	D	P	D	E
C	A	X	O	I	V	N	M	V	D
D	S	O	U	T	H	E	R	N	W

- PACIFIC
- ATLANTIC
- INDIAN
- SOUTHERN
- ARCTIC

B. Change the underlined words to correct the following sentences.

- The Earth is enclosed by delta, a layer of air.
- Earlier, it was believed that the Earth was round in shape.
- A map is a model of the Earth.
- A compass has a needle that always points to the east.
- Continents are large areas of water.
- Atlantic Ocean is the largest ocean.

C. Write true or false.

- One-fourth of the Earth's surface is covered by land. _____
- Ferdinand Magellan started his journey from Russia. _____
- The Earth is not huge. _____
- An atlas refers to a book of maps. _____
- The Earth has four continents. _____
- In reality, the land and the sky never meet. _____

Teacher's Signature: _____


Remarks: _____

Worksheet 1

A. Look at the given picture. Answer the following questions.

1. Which landform is this?

2. In which Indian state, does the majority of this landform lie?



B. Fill in the blanks. Choose words from the box.

Hills plains plateaus Bay of Bengal sand Rajasthan

- _____ are highlands that have a round top.
- Many crops grow in the fertile _____ of India.
- Highlands with steep sides and a flat top are called _____.
- The Andaman and Nicobar Islands lie in the _____.
- A desert is a large area of land covered with _____.
- The Thar Desert covers a large part of _____.

C. Match the columns.

- | | |
|---------------------|-----------------------|
| 1. Vindhya Ranges ● | ● i. mountain peak |
| 2. Mount Everest ● | ● ii. central India |
| 3. Plains ● | ● iii. rocky and hard |
| 4. Deccan Plateau ● | ● iv. Arabian Sea |
| 5. Lakshadweep ● | ● v. camels |
| 6. Thar Desert ● | ● vi. fertile |

Teacher's Signature: _____

Remarks: _____

Worksheet 2

A. Write true or false.

- India has different landforms. _____
- Hills that are very high and sharp peaks are called plateaus. _____
- The Himalayan mountain ranges lie in south India. _____
- The southern part of India is a plateau. _____
- A piece of land surrounded by water on all sides is called an island. _____
- A mountain is a large area of land covered with sand. _____

B. Fill in the blanks.

- A highland with a round top is called a _____.
- Most peaks in the Himalayan mountain ranges remain covered with _____.
- _____ such as the Yamuna and the Ganga flow through the Great Plains of India.
- The Deccan Plateau has hill ranges on _____ sides.
- Very few plants grow in a _____.
- The Indian Desert is also called the _____.

C. Find the names of the five landforms in the word search.

W	X	D	D	P	L	A	I	N	S
M	Q	E	D	L	P	Q	N	F	K
O	S	S	I	A	A	E	R	Y	S
U	W	E	S	T	D	F	V	I	I
N	X	R	T	E	Z	X	B	O	V
T	N	T	C	A	F	N	P	A	I
A	B	S	S	U	R	C	T	I	C
I	D	Z	I	S	L	A	N	D	S
N	A	X	O	I	V	N	M	V	D
S	Z	H	I	L	L	S	R	N	M

HILLS
MOUNTAINS
PLAINS
PLATEAUS
ISLANDS
DESERTS

Teacher's Signature: _____

Remarks: _____

Worksheet 1

A. Fill in the blanks.

1. _____ is the capital of India.
2. Mumbai faces the _____.
3. The Victoria Memorial is situated in _____.
4. Hyderabad is a city in the _____ part of India.
5. Chennai remains _____ throughout the year.

B. Read the names of the following places. Write the name of the city they are located in.

1. Qutb Minar: _____
2. Chhatrapati Shivaji Maharaj Terminus: _____
3. Victoria Memorial: _____
4. Science City: _____
5. Tipu Sultan's Palace: _____

C. Look at the picture. Answer the following questions.



1. Name the monument: _____
2. Write the name of the city in which this monument is located: _____

Teacher's Signature: _____


Remarks: _____

Worksheet 2

A. Write true or false.

1. Kolkata is situated on the banks of River Yamuna. _____
2. Hyderabad is located in the northern part of India. _____
3. People mostly speak Telugu in Hyderabad. _____
4. Bengaluru is the capital of Karnataka. _____
5. Chennai faces the Arabian Sea. _____

B. Look at the picture. Answer the following questions.



1. Name this structure: _____
2. Name the city in which it is situated: _____
3. Name the mode of transport that this structure is associated with: _____

C. Circle the odd one out.

- | | | |
|----------------------|--------------|-------------------|
| 1. national capital | Qutb Minar | Victoria Memorial |
| 2. major port | Belur Math | Arabian Sea |
| 3. Hugli | Arabian Sea | Yamuna |
| 4. Bangla | Telugu | hanging bridge |
| 5. Victoria Memorial | Science City | Raj Ghat |

Teacher's Signature: _____

Remarks: _____

Worksheet 1

A. Circle the correct options.

1. Chandigarh is a state/Union Territory.
2. Lucknow is situated on the banks of River Gomti/Hugli.
3. Thiruvananthapuram is the capital of Tamil Nadu/Kerala.
4. Vizag is a centre for ship-building/woollen handicrafts.
5. Patna is the capital of Bihar/Uttar Pradesh.

B. Fill in the missing letters.

1. Most people in Chandigarh speak P__N__A__I, Hindi and English.
2. The climate in Thiruvananthapuram is M__D__R__TE.
3. F__SH__NG is the main occupation of the people in Vizag.
4. G__LG__A__ is located in Patna.
5. __AL__U__ is the capital of Rajasthan.

C. Write five sentences about your favourite city.

1. _____
2. _____
3. _____
4. _____
5. _____

Teacher's Signature: _____

Remarks: _____

Worksheet 2

A. Complete the table.

State	Capital
Punjab, Haryana	
	Lucknow
Kerala	
	Patna
Rajasthan	

B. Write true or false.

1. Patna is situated on the banks of River Gomti. _____
2. Winters are chilly in Kohima. _____
3. Many people speak Telugu in Kohima. _____
4. Udaipur is the capital of Rajasthan. _____
5. Hawa Mahal is located in Jaipur. _____

C. Write the names of any five cities in India.

1. _____
2. _____
3. _____
4. _____
5. _____

Teacher's Signature: _____

Remarks: _____