

Worksheet 1

A. Tick (✓) the correct answer.

- The greatest three-digit number is _____.
 a. 100 b. 900 c. 999 d. 199
- Division is also repeated _____.
 a. addition b. subtraction c. multiplication d. division
- The answer of division is called _____.
 a. product b. factor c. quotient d. sum
- The solid shape that resembles a football is a _____.
 a. cylinder b. cuboid c. cube d. sphere
- There are _____ days in the month of April.
 a. 28 b. 29 c. 30 d. 31

B. Add or subtract.

- | H | T | O |
|-------|---|---|
| 5 | 9 | 8 |
| + 4 | 0 | 3 |
| <hr/> | | |
- | H | T | O |
|-------|---|---|
| 7 | 8 | 6 |
| + 2 | 8 | 3 |
| <hr/> | | |
- | H | T | O |
|-------|---|---|
| 3 | 8 | 5 |
| 5 | 8 | 7 |
| + 1 | 8 | 9 |
| <hr/> | | |
- | H | T | O |
|-------|---|---|
| 8 | 9 | 7 |
| - 5 | 6 | 8 |
| <hr/> | | |
- | H | T | O |
|-------|---|---|
| 7 | 2 | 0 |
| - 3 | 6 | 5 |
| <hr/> | | |
- | H | T | O |
|-------|---|---|
| 5 | 8 | 7 |
| - 3 | 8 | 5 |
| <hr/> | | |

C. What will come next? Draw it.

-
-

D. Solve these word problems.

- On Sunday, 230 men, 200 women and 352 children visited the zoo. How many people in all visited the zoo?
- There are 500 notebooks in a carton. Suresh sold 356 notebooks from the carton. How many notebooks are left in the carton?

Teacher's Signature: _____

Remarks: _____

Worksheet 2

A. Fill in the blanks.

1. One year has _____ months.
2. There are _____ quarters in a whole.
3. Multiplication is also repeated _____.
4. A standard unit for measuring small length is _____.
5. 2, 4, 6, 8, _____

B. Multiply or divide.

1.
$$\begin{array}{r} 15 \\ \times 7 \\ \hline \end{array}$$

2.
$$\begin{array}{r} 55 \\ \times 8 \\ \hline \end{array}$$

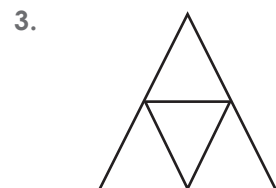
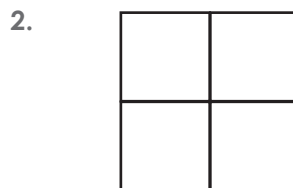
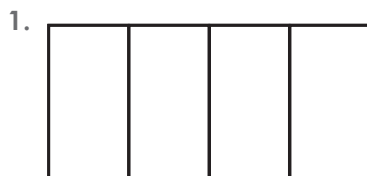
3.
$$\begin{array}{r} 608 \\ \times 3 \\ \hline \end{array}$$

4.
$$4 \overline{) 77}$$

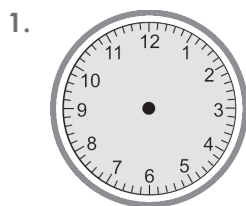
5.
$$5 \overline{) 65}$$

6.
$$6 \overline{) 315}$$


C. Colour $\frac{1}{4}$ of each shape.




D. Draw the hands on the clocks to show the given time.



10:25



half past 5



quarter to 12

E. Solve these word problems.

1. A bus can carry 40 people. How many people can be carried in 7 such buses?
2. Marya has 80 candies. She had to distribute them equally in 8 children. How many candies did she give each child?

Teacher's Signature: _____

Remarks: _____

Worksheet 1

A. Tick (✓) the correct answer.

1. The place value of the digit 8 in 8156 is _____.

- a. 8 b. 80 c. 800 d. 8000

2. The face value of 9 in 6594 is _____.

- a. 9 b. 90 c. 900 d. 9000

3. $8000 + 50 + 7 =$ _____.

- a. 8057 b. 8507 c. 857 d. 8570

4. The predecessor of 3000 is _____.

- a. 3001 b. 2999 c. 3100 d. 2100

B. Write the number names.

1. 5000 _____

2. 5300 _____

3. 2156 _____

C. Write the numbers.

1. Eight thousand four hundred fifty-six _____

2. Five thousand seven hundred eleven _____

3. Two thousand six hundred ten _____

D. Rewrite the numbers in ascending order.

1. 1058 1269 1902 1298 _____

2. 2486 1578 1269 1574 _____

3. 6253 6285 6245 6244 _____

Teacher's Signature: _____

Remarks: _____

Worksheet 2

A. Form the smallest and the greatest 4-digit numbers (Use each digit only once).

	smallest number	greatest number
0, 2, 1, 7		
5, 3, 0, 5		
7, 0, 5, 9		
8, 9, 6, 0		

B. Rewrite the numbers in descending order.

- 4213 4312 4132 4027 _____
- 5874 5494 5327 5842 _____
- 6371 6925 6436 6543 _____

C. Write the Roman Numbers for each of the following.

- 9 = _____
- 14 = _____
- 18 = _____
- 21 = _____
- 25 = _____
- 30 = _____

D. Write Hindu-Arabic numbers for these Roman numbers.

- X = _____
- XVI = _____
- XXVI = _____
- XIX = _____
- XXXVIII = _____
- XXIII = _____

E. Put >, < or = in the blanks.

- 36 _____ XXXVIII
- XXXIV _____ 69
- 80 _____ XXIX
- XXIX _____ 51
- 23 _____ XXIII
- XIV _____ 16

Teacher's Signature: _____

Remarks: _____

A. Tick (✓) the correct answer.

1. $4526 + \underline{\hspace{2cm}} = 4000 + 526$

- a. 0 b. 526 c. 4526 d. 1

2. 4 thousands + 3 hundreds + 2 tens =

- a. 4032 b. 4230 c. 4302 d. 4320

3. $70 + \underline{\hspace{2cm}} = 100$

- a. 20 b. 30 c. 70 d. 100

4. + 500 = 1000

- a. 1000 b. 500 c. 1 d. 0

B. Find the sum.

1. $377 + 21 + 30 = \underline{\hspace{2cm}}$

2. $155 + 866 + 59 = \underline{\hspace{2cm}}$

3. $345 + 899 + 100 = \underline{\hspace{2cm}}$

4. $79 + 800 + 52 = \underline{\hspace{2cm}}$

C. Fill in the missing digit.

1.

1	<input style="width: 20px; height: 20px;" type="text"/>	0	<input style="width: 20px; height: 20px;" type="text"/>
+	<input style="width: 20px; height: 20px;" type="text"/>	5	7
3	9	<input style="width: 20px; height: 20px;" type="text"/>	8

2.

4	2	<input style="width: 20px; height: 20px;" type="text"/>	3
+	<input style="width: 20px; height: 20px;" type="text"/>	2	5
7	<input style="width: 20px; height: 20px;" type="text"/>	8	<input style="width: 20px; height: 20px;" type="text"/>

3.

7	1	<input style="width: 20px; height: 20px;" type="text"/>	4
+	<input style="width: 20px; height: 20px;" type="text"/>	8	0
7	<input style="width: 20px; height: 20px;" type="text"/>	9	6

4.

<input style="width: 20px; height: 20px;" type="text"/>	6	5	<input style="width: 20px; height: 20px;" type="text"/>
+	4	3	4
6	<input style="width: 20px; height: 20px;" type="text"/>	<input style="width: 20px; height: 20px;" type="text"/>	6

5.

6	<input style="width: 20px; height: 20px;" type="text"/>	8	<input style="width: 20px; height: 20px;" type="text"/>
+	3	7	<input style="width: 20px; height: 20px;" type="text"/>
<input style="width: 20px; height: 20px;" type="text"/>	9	8	9

6.

<input style="width: 20px; height: 20px;" type="text"/>	0	0	4
+	2	7	6
9	<input style="width: 20px; height: 20px;" type="text"/>	<input style="width: 20px; height: 20px;" type="text"/>	5

D. Solve these word problems.

1. The public library bought 947 books from the Delhi Book Fair and 5050 books from the World Book Fair. How many books in all did the library buy?
2. A factory produced 980, 342 and 2375 toys in three days. Find the total number of toys produced on these three days.

Teacher's Signature: _____

Remarks: _____

Worksheet 2

A. Tick (✓) the correct answer.

- 7 hundreds and 91 ones equals _____.
a. 891 b. 719 c. 819 d. 791
- The sum of 248 and 199 equals _____.
a. 437 b. 447 c. 457 d. 347
- The sum of 38 and 34 equals 70 + _____.
a. 2 b. 6 c. 8 d. 4

B. Fill in the blanks.

- $241 + 564 + \underline{\hspace{2cm}} = 564 + \underline{\hspace{2cm}} + 190$
- $497 + 58 + 124 = 58 + \underline{\hspace{2cm}} + 497$
- $563 + \underline{\hspace{2cm}} + 415 = 415 + 224 + \underline{\hspace{2cm}}$

C. Arrange in columns and add.

- $3654 + 2542 + 2221$
- $5420 + 1022 + 258$
- $856 + 6520 + 1778$

D. Fill in the missing digit.

- | | | | | |
|-------|----------------------|----------------------|---|----------------------|
| | 4 | 0 | 5 | <input type="text"/> |
| + | <input type="text"/> | <input type="text"/> | 6 | 0 |
| <hr/> | | | | |
| | <input type="text"/> | 9 | 1 | 9 |
- | | | | | |
|-------|----------------------|----------------------|---|----------------------|
| | 3 | <input type="text"/> | 7 | 4 |
| + | <input type="text"/> | 0 | 6 | 5 |
| <hr/> | | | | |
| | 4 | 9 | 3 | <input type="text"/> |
- | | | | | |
|-------|---|----------------------|----------------------|----------------------|
| | 4 | 0 | <input type="text"/> | 0 |
| + | 1 | <input type="text"/> | 0 | 0 |
| <hr/> | | | | |
| | 5 | 6 | 5 | <input type="text"/> |

E. Solve the following word problems.

- A poultry farm produces 1479 eggs on Monday and 987 eggs on Tuesday. How many eggs are produced on these days?
- Rohan saved ₹4500 in April and ₹2758 in May. How much money did he save in these months?
- There are 2576 boys and 1849 girls studying in a school. What is the total number of students in the school?

Teacher's Signature: _____

Remarks: _____

A. Tick (✓) the correct answer.

1. In January, there were 24 working days. How many days were holidays?

a. 13 b. 7 c. 6 d. 5

2. 12 less than 21 is

a. 12. b. 9. c. 10. d. 8

3. When a number is subtracted from itself, the difference is

a. Itself. b. 0. c. 100. d. 1

4. When we count back 250 from 750, we get

a. 1000. b. 250. c. 300 d. 500.

B. Fill in the blanks.

1. $35 + \underline{\hspace{2cm}} = 35 - 0$

2. $\underline{\hspace{2cm}}$ is 100 less than 2750.

3. $\underline{\hspace{2cm}}$ needs to be added to 64 to get 774.

4. $7500 - \underline{\hspace{2cm}} = \text{Seven thousand}$

5. 10 less than 9900 is $\underline{\hspace{2cm}}$.

C. Solve.

1. $1752 + 943 - 3758 + 1401 = \underline{\hspace{2cm}}$

2. $2584 + 934 - 2158 + 1098 = \underline{\hspace{2cm}}$

3. $4115 + 2121 - 3495 - 749 = \underline{\hspace{2cm}}$

D. Solve these word problems.

1. There were 926 bags of sugar in a warehouse. 649 bags of sugar were delivered to various shops on Monday. On Tuesday, 1004 more bags were put in the warehouse. How many bags are there in the warehouse now?

2. Rohan had ₹3265 and his grandmother gave him ₹2500. He bought a pair of shoes for ₹3788. How much money was left with him?

Teacher's Signature: _____

Remarks: _____

Worksheet 2

A. Tick (✓) the correct answer.

1. What number do you get when 1 is subtracted from 3000?

- a. 3001 b. 3009 c. 4009 d. 2999

2. From which number is 100 subtracted to get 5000?

- a. 4900 b. 5100 c. 4199 d. 8000

3. What is the difference of 2156 and its predecessor?

- a. 0 b. 1 c. 2155 d. 2157

4. What number do you get when 1000 is subtracted from 6378?

- a. 5378 b. 5278 c. 6278 d. 7378

B. Fill in the missing digits.

1.

$$\begin{array}{r} 3 \square 7 \\ - 2 \ 1 \square \\ \hline \square 4 \ 3 \end{array}$$

2.

$$\begin{array}{r} 7 \ 8 \square \\ - 3 \square 2 \\ \hline \square 8 \ 5 \end{array}$$

3.

$$\begin{array}{r} 6 \ 9 \square \\ - 4 \ 3 \ 2 \\ \hline \square 6 \ 5 \end{array}$$

C. Solve.

1. $2519 + 608 - 1847 + 543 - 487 = \underline{\hspace{2cm}}$

2. $3222 + 1144 - 2311 + 999 - 878 = \underline{\hspace{2cm}}$

3. $3413 + 2242 - 2845 + 777 - 315 = \underline{\hspace{2cm}}$

D. Solve these word problems.

1. A school library had 9999 books on Science fiction, Maths puzzles and English classics. If there were 3758 books on Maths puzzles and 3979 books on Science fiction, find the number of English classics.
2. The farmers brought 4175 kg of potatoes and 2098 kg of onions to the vegetable market. They sold 2945 kg of potatoes and 579 kg of onions. Find the total quantity of potatoes and onions left.

Teacher's Signature: _____

Remarks: _____

Worksheet 1

A. Tick (✓) the correct answer.

- Which solid shape has only flat faces?
 a. Cube b. Cylinder c. Cone d. Sphere
- Which solid shape does not have corners?
 a. Cube b. Cuboid c. Sphere d. Cone
- Which solid shape has only one curved edge?
 a. Cube b. Cone c. Cylinder d. Cuboid
- What do you call the surface of a solid shape?
 a. Edge b. Corner c. Face d. Cube


















B. Fill in the blanks.

- A line has _____ end points.
- A _____ line follows a straight path.
- A _____ line changes direction.
- A line segment has _____ end points.
- A _____ has a starting point and goes on indefinitely in one direction.

**C. Write S for the object that can be used to draw straight lines.
 Write C for the object that can be used to draw curved lines.**

1.		2.		3.		4.	
							

D. Draw the missing shape in each pattern.

-      _____
-     _____ 
-     _____   

Teacher's Signature: _____

Remarks: _____

Worksheet 2

A. Tick (✓) the correct answer.

- All sides are of equal length in a _____.
 a. circle b. cone c. cylinder d. square
- The number of plane faces in a cuboid is _____.
 a. 4 b. 6 c. 2 d. 3
- The wheel of a bicycle is an example of _____.
 a. cylinder b. sphere c. circle d. triangle
- The surface of a solid shape is its _____.
 a. edge b. face c. size d. corner

B. Name the shape of each object.

1.



2.



3.



4.



5.



6.



C. Fill in the table.

	Solid shape	Faces		Edges		Corners
		Flat	Curved	Straight	Curved	
1.	Cube					
2.	Sphere					
3.	Cone					
4.	Cylinder					

Teacher's Signature: _____

Remarks: _____

A. Tick (✓) the correct answer.

- The product of 100 and 5 is _____.
 a. 105 b. 501 c. 1005 d. 500
- The product of the smallest 2-digit number and the greatest 2-digit number is _____.
 a. 999 b. 100 c. 990 d. 900
- The product of 11 and 102 is _____.
 a. $11 \times 99 + 1$ b. $11 \times 100 + 11$
 c. $11 \times 102 - 11$ d. $11 \times 100 + 11 + 11$
- The product of a number and 0 is _____.
 a. the number itself b. 0
 c. 100 d. 1

B. Simplify the following.

- $60 \times 10 =$ _____
- $35 \times$ _____ $= 0$
- _____ $\times 11 = 110$
- _____ $\times 15 = 90$
- $23 \times 700 =$ _____
- $24 \times 100 - 24 =$ _____

C. Find the product.

- $$\begin{array}{r} 63 \\ \times 21 \\ \hline \end{array}$$
- $$\begin{array}{r} 89 \\ \times 72 \\ \hline \end{array}$$
- $$\begin{array}{r} 94 \\ \times 73 \\ \hline \end{array}$$
- $$\begin{array}{r} 142 \\ \times 54 \\ \hline \end{array}$$

D. Solve these word problems.

- A paint box has 78 tubes of paint. How many tubes will 7 such boxes will have?
- A Maths notebook contains 199 pages. Each page has 20 lines. How many lines are there in all in the notebook?

Teacher's Signature: _____

Remarks: _____

Worksheet 2

A. Write true or false.

- $10 \times 5 = 25 \times 2$ _____
- $(2 \times 3) \times 4 = 8 \times 3$ _____
- $70 \times 0 = 0 \times 70$ _____
- $1 \times 1 = 1 + 0$ _____
- $356 \times 0 = 750 \times 0$ _____

B. Solve.

- $111 \times 3 =$ _____
- $626 \times 6 =$ _____
- $107 \times 5 =$ _____
- $429 \times 8 =$ _____
- $345 \times 4 =$ _____
- $127 \times 7 =$ _____

C. Find the product.

- $$\begin{array}{r} 45 \\ \times 83 \\ \hline \end{array}$$
- $$\begin{array}{r} 147 \\ \times 49 \\ \hline \end{array}$$
- $$\begin{array}{r} 86 \\ \times 79 \\ \hline \end{array}$$
- $$\begin{array}{r} 104 \\ \times 23 \\ \hline \end{array}$$

D. Solve these word problems.

- Each ring on the tree trunk shows the growth of the tree for 12 months. How old is the tree in months if it has 35 rings?
- A book contains 756 pages. Find the number of pages in 12 such books.

Teacher's Signature: _____

Remarks: _____

Worksheet 1

A. Tick (✓) the correct answer.

1. How many times should 5 be subtracted from 25 to get 0?

- a. 5 b. 6 c. 4 d. 3

2. What is the quotient if the dividend is 35 and the divisor is 7?

- a. 10 b. 5 c. 4 d. 9

3. What is the divisor in the division fact $16 \div 2 = 8$?

- a. 8 b. 16 c. 2 d. 0

4. What is the dividend in the division fact $24 \div 6 = 4$?

- a. 24 b. 6 c. 4 d. 0

B. Write the division facts for the following multiplication facts.

1. $12 \times 8 = 96$

2. $25 \times 12 = 300$

a. _____ \div _____ = _____

a. _____ \div _____ = _____

b. _____ \div _____ = _____

b. _____ \div _____ = _____

C. Find the quotients.

1. $96 \div 4$

2. $214 \div 2$

3. $753 \div 3$

4. $582 \div 6$

5. $792 \div 9$

6. $752 \div 8$

D. Answer these questions.

1. How many 7s are there in 21?

2. How many 4s are there in 24?

3. How many 3s are there in 27?

4. How many times can 3 be subtracted from 18?

5. How many times can 6 be subtracted from 30?

Teacher's Signature: _____

Remarks: _____

Worksheet 2

A. Tick (✓) the correct answer.

- How many times should 6 be subtracted from 36 to get 0?
a. 5. b. 6 c. 4 d. 3
- What is the quotient if the dividend is 100 and the divisor is 20?
a. 10 b. 5 c. 4 d. 9
- What is the divisor in the division fact $25 \div 5 = 5$?
a. 5 b. 4 c. 25 d. 0
- What is the dividend in the division fact $42 \div 7 = 6$?
a. 7 b. 6 c. 0 d. 42

B. Divide on the number lines and write the quotients.



$20 \div 5 =$ _____



$15 \div 3 =$ _____

C. Fill in the blanks.

- $785 \div \underline{\hspace{2cm}} = 785$
- $6500 \div 100 = \underline{\hspace{2cm}}$
- $3654 \div 10$; Q = _____, R = _____
- $7542 \div 100$; Q = _____, R = _____
- $8475 \div 100$; Q = _____, R = _____

D. Solve these word problems.

- Lalit arranged 378 hats in 6 equal groups. How many hats are there in each group?
- Grandpa has ₹2364. He wants to give each of his 6 grandchildren an equal amount of money. How much money will he give to each grandchild?
- There are 2169 students in a school. If the school has 9 clubs, and each club has an equal number of members, then how many students are there in each club?

Teacher's Signature: _____

Remarks: _____

A. Tick (✓) the correct answer.

1. The fraction for the shaded part of the given picture is _____.



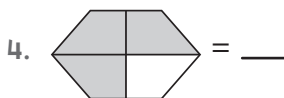
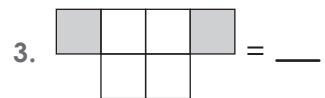
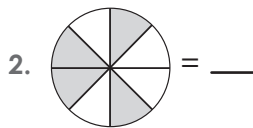
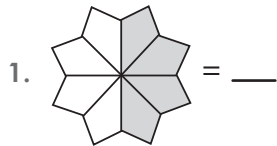
- a. $\frac{2}{5}$ b. $\frac{3}{5}$ c. $\frac{4}{5}$ d. $\frac{1}{4}$

2. The fraction for the shaded images of the given collection is _____.



- a. $\frac{1}{2}$ b. $\frac{6}{8}$ c. $\frac{6}{9}$ d. $\frac{6}{10}$

B. Write the fractions of the shaded portions.



C. Add the following fractions.

1. $\frac{1}{4} + \frac{1}{4} =$ 2. $\frac{1}{5} + \frac{2}{5} =$ 3. $\frac{2}{7} + \frac{3}{7} =$ 4. $\frac{1}{11} + \frac{5}{11} =$

D. Write the following fractions in ascending order.

1. $\frac{4}{8}, \frac{6}{8}, \frac{7}{8}, \frac{3}{8}$ _____

2. $\frac{5}{10}, \frac{1}{10}, \frac{6}{10}, \frac{8}{10}$ _____

3. $\frac{4}{15}, \frac{8}{15}, \frac{1}{15}, \frac{3}{15}$ _____

Teacher's Signature: _____

Remarks: _____

Worksheet 2

A. Write the correct answer.

1. $\frac{1}{4}$ of 40 people = _____

2. $\frac{2}{4}$ of 20 apples = _____

3. $\frac{3}{4}$ of 48 pencils = _____

4. $\frac{2}{3}$ of 30 butterflies = _____

5. $\frac{5}{6}$ of 30 carrots = _____

6. $\frac{4}{7}$ of 42 balloons = _____

B. Subtract the following.

1. $\frac{2}{5} - \frac{1}{5} =$

2. $\frac{4}{7} - \frac{2}{7} =$

3. $\frac{5}{9} - \frac{4}{9} =$

4. $\frac{6}{11} - \frac{3}{11} =$

C. Comparing using $>$, $<$ or $=$.

1. $\frac{3}{4}$ $\frac{1}{4}$

2. $\frac{1}{6}$ $\frac{5}{6}$

3. $\frac{3}{9}$ $\frac{3}{9}$

4. $\frac{2}{7}$ $\frac{4}{7}$

5. $\frac{5}{10}$ $\frac{8}{10}$

6. $\frac{7}{8}$ $\frac{5}{8}$

D. Write the following fractions in descending order.

1. $\frac{1}{7}, \frac{3}{7}, \frac{5}{7}, \frac{2}{7}$ _____

2. $\frac{3}{9}, \frac{7}{9}, \frac{5}{9}, \frac{2}{9}$ _____

3. $\frac{10}{13}, \frac{12}{13}, \frac{11}{13}, \frac{9}{13}$ _____

E. Solve these word problems.

1. Neha had 18 balloons. She gave two-thirds of the balloons to Bhawna. How many balloons did Bhawna get?

2. Seema had 8 books. She gave three-fourths of the books to Vijay. How many books did Vijay get?

Teacher's Signature: _____

Remarks: _____

Worksheet 1

A. Tick (✓) the correct answer.

1. 9 rupees 5 paise is the same as

- a. ₹9.50. b. 9050 p. c. ₹90.50. d. ₹90.05.

2. 2080 p = _____

- a. ₹2.80 b. ₹20.80 c. ₹20.08 d. ₹2080

3. ₹10 = _____ p

- a. 10 b. 100 c. 1000 d. 10000

4. ₹70.50 + ₹128 = _____

- a. ₹198.50 b. ₹200 c. ₹189.50 d. ₹198.05

5. ₹100 – ₹65 = _____ p

- a. 35 b. 350 c. 3500 d. 3050

B. Convert the following to paise.

1. ₹2.05 2. 17 rupees 50 paise 3. ₹67.90

C. Add.

- | | | | | | | | | | | | | | | | | | | | | | | | | | | |
|--|-----|---|----|----|---|----|--|--|--|---|---|----|----|---|----|--|--|--|---|---|-----|----|---|-----|--|--|
| <p>1.</p> <table border="0" style="margin-left: 40px;"> <tr> <td style="padding-right: 20px;">₹</td> <td style="padding-right: 20px;">P</td> </tr> <tr> <td style="padding-right: 20px;">35</td> <td>35</td> </tr> <tr> <td style="padding-right: 20px;">+</td> <td>25</td> </tr> <tr> <td colspan="2" style="border-top: 1px solid black; border-bottom: 1px solid black;"></td> </tr> </table> | ₹ | P | 35 | 35 | + | 25 | | | <p>2.</p> <table border="0" style="margin-left: 40px;"> <tr> <td style="padding-right: 20px;">₹</td> <td style="padding-right: 20px;">P</td> </tr> <tr> <td style="padding-right: 20px;">54</td> <td>40</td> </tr> <tr> <td style="padding-right: 20px;">+</td> <td>32</td> </tr> <tr> <td colspan="2" style="border-top: 1px solid black; border-bottom: 1px solid black;"></td> </tr> </table> | ₹ | P | 54 | 40 | + | 32 | | | <p>3.</p> <table border="0" style="margin-left: 40px;"> <tr> <td style="padding-right: 20px;">₹</td> <td style="padding-right: 20px;">P</td> </tr> <tr> <td style="padding-right: 20px;">121</td> <td>15</td> </tr> <tr> <td style="padding-right: 20px;">+</td> <td>104</td> </tr> <tr> <td colspan="2" style="border-top: 1px solid black; border-bottom: 1px solid black;"></td> </tr> </table> | ₹ | P | 121 | 15 | + | 104 | | |
| ₹ | P | | | | | | | | | | | | | | | | | | | | | | | | | |
| 35 | 35 | | | | | | | | | | | | | | | | | | | | | | | | | |
| + | 25 | | | | | | | | | | | | | | | | | | | | | | | | | |
| | | | | | | | | | | | | | | | | | | | | | | | | | | |
| ₹ | P | | | | | | | | | | | | | | | | | | | | | | | | | |
| 54 | 40 | | | | | | | | | | | | | | | | | | | | | | | | | |
| + | 32 | | | | | | | | | | | | | | | | | | | | | | | | | |
| | | | | | | | | | | | | | | | | | | | | | | | | | | |
| ₹ | P | | | | | | | | | | | | | | | | | | | | | | | | | |
| 121 | 15 | | | | | | | | | | | | | | | | | | | | | | | | | |
| + | 104 | | | | | | | | | | | | | | | | | | | | | | | | | |
| | | | | | | | | | | | | | | | | | | | | | | | | | | |

D. Solve these word problems.

- Amar bought a book for ₹70.75 and a notebook for ₹10.50. How much money did he pay to shopkeeper?
- Sam bought a shirt for ₹450.25. He gave a ₹500 note to the shopkeeper. How much money will he get in return?

Teacher's Signature: _____

Remarks: _____

Worksheet 2

A. Write in figures.

1. 2 rupees 17 paise

2. 6 rupees 80 paise

3. 42 rupees 1 paise

4. twenty rupees nineteen paise

5. forty-six rupees thirty-one paise

B. Subtract.

1.

	₹		P
	4	3	5
	2		5
-	3	2	0
	1		5
<hr/>			

2.

	₹		P
	5	5	4
		7	5
-	1	5	5
		4	5
<hr/>			

3.

	₹		P
	7	5	8
		6	5
-	2	2	9
		3	5
<hr/>			

C. Multiply.

1.

₹	5	.	2	5
×			2	
<hr/>				
₹				
<hr/>				

2.

₹	2	.	5	0
×			5	
<hr/>				
₹				
<hr/>				

3.

₹	6	.	6	5
×			7	
<hr/>				
₹				
<hr/>				

D. Solve these word problems.

1. A book costs ₹105.50 and a notebook costs ₹20.25. Which item is more costly and by how much?
2. Simar wants to a dozen of pen. How she will have to pay, if each pen cost ₹12.50?

Teacher's Signature: _____

Remarks: _____

Worksheet 1

A. Tick (✓) the correct answer.

1. At what time both the hands of a clock are exactly opposite to each other?

- a. 6:00 b. 12:00 c. 1:30 d. 6:30

2. Which day is two days ahead of Saturday?

- a. Monday b. Sunday
 c. Wednesday d. Friday

3. Which month comes before October?

- a. April b. November
 c. August d. September

B. Write the time in words.

1.



2.



3.



C. Convert years into days.

1. 1 year

2. 4 years

3. 5 years

D. Convert months into days.

1. 3 months

2. 5 months

3. 7 months

E. Convert weeks into days.

1. 2 weeks

2. 3 weeks

3. 8 weeks

Teacher's Signature: _____

Remarks: _____

Worksheet 2

A. Tick (✓) the correct answer.



- Which of the following will be a leap year?
a. 2023 b. 2027 c. 2028 d. 2030
- Which of the following months has 31 days?
a. February b. April c. June d. July
- Which of the following months has 30 days?
a. January b. April c. August d. December
- How many days are there in a leap year?
a. 364 days b. 365 days c. 366 days d. 367 days

B. Write dates in different formats.

- 14 January 2021 14/01/2021 1/14/2021
- 26 January 1950 _____ _____
- 2 October 2021 _____ 10/2/2021
- _____ 17/11/2021 _____
- _____ 05/07/2022 _____

C. Match the time with the clock.

- 11:45 2. 4:30 3. 7:15 4. 10:05



D. Convert into days.

- 4 weeks _____
- 1 year _____
- 2 months _____

Teacher's Signature: _____

Remarks: _____

A. Convert and write.

1. 6 kg = _____ g
2. 1 g 872 mg = _____ g
3. 3 km 752 m = _____ m
4. 5000 cm = _____ m
5. 1425 ml = _____ l _____ ml
6. 31 l 828 ml = _____ ml

B. Add.

1. 4 m 46 cm and 9 m 35 cm
2. 27 km 4 m and 36 km 8 m
3. 64 m 73 cm and 51 m 36 cm
4. 44 kg 62 g and 18 kg 59 g
5. 15 l 230 ml and 20 l 100 ml

C. Subtract.

1. 67 kg 244 g from 83 kg 448 g
2. 104 kg 635 g from 352 kg 452 g
3. 18 m 54 cm from 35 m 28 cm
4. 43 km 4 m from 57 km 8 m
5. 45 l 585 ml from 75 l 369 l

D. Solve these word problems.

1. Vidhi bought 20 kg 500 g rice. By the end of the month only 4 kg 250 g rice was left. What was the quantity of rice consumed?
2. David bought 5 kg of potato, 1 kg of lady finger, 1 kg 500 g of tomatoes and 100 g of green chilies. What is the total weight of the vegetables he bought?

Teacher's Signature: _____

Remarks: _____

Worksheet 2

A. Fill in the blanks.

1. 4 kg 210 g = _____ g
2. 6 g = _____ kg
3. 1 m 148 cm = _____ cm
4. 1144 km = _____ km _____ m
5. 9200 l = _____ ml
6. 2548 ml = _____ l _____ ml

B. Add.

1. 48 m 24 cm and 82 m 45 cm
2. 215 km 421 m and 481 km 20 m
3. 48 kg 4520 g and 485 kg 360 g
4. 444 kg 674 g and 154 kg 459 g
5. 78 l 254 ml and 472 l 400 ml

C. Subtract.

1. 256 kg 142 g from 546 kg 256 g
2. 123 kg 365 g from 754 kg 25 g
3. 29 m 35 cm from 45 m 10 cm
4. 457 km 15 m from 784 km 150 m
5. 755 l 365 ml from 985 l 302 l

D. Solve these word problems.

1. The height of a building is 24 m 75 cm. The height of another building is 11 m 50 cm. What is the difference between the heights of the two buildings?
2. In an office party 22 L 250 mL tea was prepared. At the end of the party 5 L 500 mL tea was left over. What was the quantity of tea consumed?

Teacher's Signature: _____

Remarks: _____

Worksheet 1

A. The tally marks in the table show the favourite colour of Class 3 students. Complete the table and answer these questions.

- Which is the favourite colour of the most number of students?

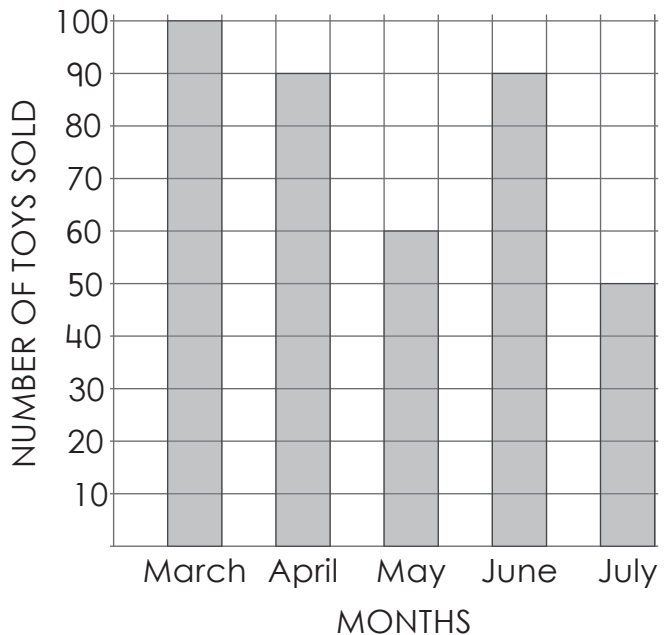
- Which is the favourite colour of the least number of students?

- How many students have orange and blue as their favourite colours? _____

Colours	Tally marks	Total
Red		
Orange		
Yellow		
Green		
Blue		

B. The bar graph shows the number of toys sold by a toy shop from March to July.

- In which month was the least number of toys sold? _____
- In which month was the most number of toys sold? _____
- How many more toys were sold in April than in May? _____









Teacher's Signature: _____

Remarks: _____

Worksheet 2

A. The pictograph shows the favourite sport of the students of Class 3. Use it to fill in the blanks.

1. The favourite sport of the most number of students is _____
2. The favourite sport of the least number of students is _____
3. The number of students whose favourite sports are skating and swimming is _____
4. The total number of students in Class 3 is _____

Favourite sport of Class 3 students	
Cricket	
Swimming	
Table tennis	
Football	
Skating	
Each  stands for 5 students.	

B. The data shows the number of students of Class 3A who participated in various events during the annual function. Draw tally marks to record the data.

	Event	Number of students	Tally marks
1.	Drama	7	
2.	Race	5	
3.	Dance	9	
4.	Singing	8	
5.	Karate	4	

Teacher's Signature: _____

Remarks: _____