

Worksheet 1

A. Find and circle the words related to early humans in the wordsearch.

Z	I	X	V	I	A	N	K	C	T
P	T	W	S	E	P	Q	N	F	S
E	V	O	L	U	T	I	O	N	K
L	W	G	E	A	D	F	V	I	W
A	X	B	D	O	Z	X	B	O	E
N	N	Y	G	D	E	F	P	A	A
F	I	R	E	A	R	C	T	I	P
I	D	Z	S	W	H	D	P	D	O
Q	A	X	O	I	V	N	M	V	N
F	A	R	M	I	N	G	T	V	S

- EVOLUTION
- SLEDGES
- WEAPONS
- FARMING
- FIRE

B. The underlined words are incorrect. Rewrite the sentence in your notebook using the correct words.

- Humans have remained the same over time.
- Early humans ate fruits, roots, nuts and pastry
- Early humans used glass of different sizes to make tools.
- Early humans discovered that food could be made by rubbing two stones together.
- Early humans discovered the wheel.

C. Fill in the blanks. Choose words from the box.

evolution hunted tools discovered back

- The process of change over a period of time is called _____.
- Early humans _____ small animals.
- Stone _____ were used for cutting and making things.
- Early humans _____ fire.
- Early humans carried loads on their _____.

Teacher's Signature: _____


Remarks: _____

Worksheet 2

A. Write true or false.

1. Early humans did not know how to cook food.
2. Early humans hunted fruits.
3. Early humans used weapons for painting.
4. Early humans lit fire to stay warm.
5. Early humans started farming.

B. Look at the picture. Answer the following questions.



1. Name the discovery of early humans.

2. Write any two uses of it by early humans.

C. Fill in the blanks.

1. Early humans used animals and _____ to carry loads.
2. Early humans learnt that _____ made it easier and faster to carry loads.
3. Early humans noticed that the seeds of the wild fruits they ate and threw grew into new _____.
4. _____ cities is a feature of civilizations.
5. Humans evolved from _____.

Teacher's Signature: _____

Remarks: _____

A. Fill in the blanks. Choose words from the brackets.

1. The Earth is enclosed by an atmosphere, a layer of _____. (air/water)
2. The Earth is _____ in shape. (flat/round)
3. The _____ is a model used to study the Earth. (globe/map)
4. The compass has a needle that always points to the _____. (north/south)
5. India is in _____. (Asia/Europe)
6. _____ are very large bodies of water. (Lakes/Oceans)

B. Write one-word answers.

1. The Earth constitutes this ratio of water. _____
2. The Earth's shape resembles this fruit. _____
3. This is a drawing of the Earth or a part of it. _____
4. This instrument was used by sailors to find directions. _____
5. These are large areas of land. _____
6. This is the largest continent. _____

C. Find the odd one out in each set.

- | | | |
|------------------|----------------|------------|
| 1. land | air | rocket |
| 2. globe | compass | map |
| 3. north | east | Asia |
| 4. Australia | Antarctica | New Delhi |
| 5. Pacific Ocean | Atlantic Ocean | River Nile |
| 6. horizon | land | water |

Teacher's Signature: _____

Remarks: _____

Worksheet 2

A. Find the names of the five oceans in the word search.

V	I	N	D	I	A	N	K	C	P
A	T	W	D	E	P	Q	N	F	A
T	S	U	I	C	A	E	R	Y	C
L	W	G	S	A	D	F	V	I	I
A	X	B	T	O	Z	X	B	O	F
N	N	Y	C	D	F	N	P	A	I
T	B	C	S	A	R	C	T	I	C
I	D	Z	Q	W	H	D	P	D	E
C	A	X	O	I	V	N	M	V	D
D	S	O	U	T	H	E	R	N	W

PACIFIC
ATLANTIC
INDIAN
SOUTHERN
ARCTIC

B. Change the underlined words to correct the following sentences.

1. The Earth is enclosed by delta, a layer of air.
2. Earlier, it was believed that the Earth was round in shape.
3. A map is a model of the Earth.
4. A compass has a needle that always points to the east.
5. Continents are large areas of water.
6. Atlantic Ocean is the largest ocean.

C. Write true or false.

1. One-fourth of the Earth's surface is covered by land. _____
2. Ferdinand Magellan started his journey from Russia. _____
3. The Earth is not huge. _____
4. An atlas refers to a book of maps. _____
5. The Earth has four continents. _____
6. In reality, the land and the sky never meet. _____

Teacher's Signature: _____


Remarks: _____

Worksheet 1

A. Look at the given picture. Answer the following questions.

1. Which landform is this?

2. In which Indian state, does the majority of this landform lie?



B. Fill in the blanks. Choose words from the box.

Hills plains plateaus Bay of Bengal sand Rajasthan

- _____ are highlands that have a round top.
- Many crops grow in the fertile _____ of India.
- Highlands with steep sides and a flat top are called _____.
- The Andaman and Nicobar Islands lie in the _____.
- A desert is a large area of land covered with _____.
- The Thar Desert covers a large part of _____.

C. Match the columns.

- | | |
|---------------------|-----------------------|
| 1. Vindhya Ranges ● | ● i. mountain peak |
| 2. Mount Everest ● | ● ii. central India |
| 3. Plains ● | ● iii. rocky and hard |
| 4. Deccan Plateau ● | ● iv. Arabian Sea |
| 5. Lakshadweep ● | ● v. camels |
| 6. Thar Desert ● | ● vi. fertile |

Teacher's Signature: _____

Remarks: _____

Worksheet 2

A. Write true or false.

- India has different landforms. _____
- Hills that are very high and sharp peaks are called plateaus. _____
- The Himalayan mountain ranges lie in south India. _____
- The southern part of India is a plateau. _____
- A piece of land surrounded by water on all sides is called an island. _____
- A mountain is a large area of land covered with sand. _____

B. Fill in the blanks.

- A highland with a round top is called a _____.
- Most peaks in the Himalayan mountain ranges remain covered with _____.
- _____ such as the Yamuna and the Ganga flow through the Great Plains of India.
- The Deccan Plateau has hill ranges on _____ sides.
- Very few plants grow in a _____.
- The Indian Desert is also called the _____.

C. Find the names of the five landforms in the word search.

W	X	D	D	P	L	A	I	N	S
M	Q	E	D	L	P	Q	N	F	K
O	S	S	I	A	A	E	R	Y	S
U	W	E	S	T	D	F	V	I	I
N	X	R	T	E	Z	X	B	O	V
T	N	T	C	A	F	N	P	A	I
A	B	S	S	U	R	C	T	I	C
I	D	Z	I	S	L	A	N	D	S
N	A	X	O	I	V	N	M	V	D
S	Z	H	I	L	L	S	R	N	M

HILLS
MOUNTAINS
PLAINS
PLATEAUS
ISLANDS
DESERTS

Teacher's Signature: _____

Remarks: _____

Worksheet 1

A. Fill in the blanks.

1. _____ is the capital of India.
2. Mumbai faces the _____.
3. The Victoria Memorial is situated in _____.
4. Hyderabad is a city in the _____ part of India.
5. Chennai remains _____ throughout the year.

B. Read the names of the following places. Write the name of the city they are located in.

1. Qutb Minar: _____
2. Chhatrapati Shivaji Maharaj Terminus: _____
3. Victoria Memorial: _____
4. Science City: _____
5. Tipu Sultan's Palace: _____

C. Look at the picture. Answer the following questions.



1. Name the monument: _____
2. Write the name of the city in which this monument is located: _____

Teacher's Signature: _____


Remarks: _____

Worksheet 2

A. Write true or false.

1. Kolkata is situated on the banks of River Yamuna. _____
2. Hyderabad is located in the northern part of India. _____
3. People mostly speak Telugu in Hyderabad. _____
4. Bengaluru is the capital of Karnataka. _____
5. Chennai faces the Arabian Sea. _____

B. Look at the picture. Answer the following questions.



1. Name this structure: _____
2. Name the city in which it is situated: _____
3. Name the mode of transport that this structure is associated with: _____

C. Circle the odd one out.

- | | | |
|----------------------|--------------|-------------------|
| 1. national capital | Qutb Minar | Victoria Memorial |
| 2. major port | Belur Math | Arabian Sea |
| 3. Hugli | Arabian Sea | Yamuna |
| 4. Bangla | Telugu | hanging bridge |
| 5. Victoria Memorial | Science City | Raj Ghat |

Teacher's Signature: _____

Remarks: _____

Worksheet 1

A. Circle the correct options.

1. Chandigarh is a state/Union Territory.
2. Lucknow is situated on the banks of River Gomti/Hugli.
3. Thiruvananthapuram is the capital of Tamil Nadu/Kerala.
4. Vizag is a centre for ship-building/woollen handicrafts.
5. Patna is the capital of Bihar/Uttar Pradesh.

B. Fill in the missing letters.

1. Most people in Chandigarh speak P__N__A__I, Hindi and English.
2. The climate in Thiruvananthapuram is M__D__R__TE.
3. F__SH__NG is the main occupation of the people in Vizag.
4. G__LG__A__ is located in Patna.
5. __AL__U__ is the capital of Rajasthan.

C. Write five sentences about your favourite city.

1. _____
2. _____
3. _____
4. _____
5. _____

Teacher's Signature: _____

Remarks: _____

Worksheet 2

A. Complete the table.

State	Capital
Punjab, Haryana	
	Lucknow
Kerala	
	Patna
Rajasthan	

B. Write true or false.

1. Patna is situated on the banks of River Gomti. _____
2. Winters are chilly in Kohima. _____
3. Many people speak Telugu in Kohima. _____
4. Udaipur is the capital of Rajasthan. _____
5. Hawa Mahal is located in Jaipur. _____

C. Write the names of any five cities in India.

1. _____
2. _____
3. _____
4. _____
5. _____

Teacher's Signature: _____

Remarks: _____

Worksheet 1

A. Read the clues. Write the name of the state/ Union Territory it is associated with.

1. Pashmina wool: _____
2. *Phulkari*: _____
3. *Panche*: _____
4. *Jamdani* saris: _____
5. *Mekhela chador*: _____

B. The underlined words in the given sentences are incorrect. Rewrite the correct sentences in your notebook.

1. Saffron is a beverage.
2. *Phulkari* is a famous handmade embroidery from Assam.
3. Karnataka is famous for its cotton and wool textiles.
4. The Kanchipuram cotton saris of Tamil Nadu are famous.
5. *Mishti doi* is a popular savoury dish from West Bengal.

C. Circle the correct options.

1. Pashmina **wool/cotton** is used to make shawls.
2. *Sarso da saag* is a popular dish from **Punjab/Haryana**.
3. *Baluchari* silk saris are popular in **West Bengal/Assam**.
4. *Malpua* is a **sweet/snack**.
5. *Paat* is a **cotton/silk** textile.

Teacher's Signature: _____

Remarks: _____

Worksheet 2

A. Write true or false.

1. *Pheran* is a shawl worn by people in Jammu & Kashmir. _____
2. People drink *kahwa*, a traditional coffee to keeps the body warm. _____
3. *Lassi* is a drink made using curd. _____
4. *Bisi bele* bath is a popular dish from Karnataka. _____
5. *Sandesh* is a popular sweet from Assam. _____

B. Write one-word answers.

1. A long woollen, loose gown worn by people of Jammu & Kashmir: _____
2. A headgear worn by men in Punjab: _____
3. A popular cotton sari of Karnataka: _____
4. A staple food item of West Bengal: _____
5. *Pitha* and *Laroo* are prepared during this festival: _____

C. Find and circle the names of six food items in this wordsearch.

W	X	D	D	P	L	A	P	N	S
A	P	P	A	M	P	Q	O	F	K
O	O	S	I	A	A	E	H	Y	A
U	R	E	S	T	D	F	A	I	B
P	I	T	I	K	A	X	B	O	A
T	Y	T	C	A	F	N	P	A	R
A	A	S	S	U	R	C	T	I	G
I	L	Z	I	S	L	A	N	D	A
N	A	X	O	I	V	N	M	V	H
M	O	H	A	N	T	H	A	L	M

KABARGAH
 APPAM
 PORIYAL
 PITIKA
 MOHANTHAL
 POHA

Teacher's Signature: _____

Remarks: _____

Worksheet 1

A. Write true or false.

1. Explorers are people who discover new lands. _____
2. Christopher Columbus was an Italian explorer. _____
3. Christopher Columbus discovered South Africa. _____
4. Vasco da Gama was an explorer from Portugal. _____
5. Ferdinand Magellan gave Pacific Ocean its name. _____

B. Rearrange the letters to complete the sentences.

1. Some explorers have wanted to learn more about their own ANLD.
2. In the year 1498, Vasco da Gama reached CUTCALI in India.
3. Vasco da Gama was the first person from ROPEEU to reach India by sea.
4. Ferdinand Magellan was an explorer from GALPORTU.
5. Ferdinand Magellan gave FICPACI Ocean its name.

C. Find and circle words related to explorers in the wordsearch.

M	G	A	M	E	R	I	C	A
P	O	R	T	U	G	A	L	A
A	L	W	E	O	D	M	T	B
S	A	M	A	P	O	T	O	A
S	L	Q	J	L	V	K	N	H
A	P	X	W	D	Q	K	S	A
G	E	A	G	I	X	G	S	M
E	C	Y	M	E	R	T	V	A
N	E	W	W	O	R	L	D	S

- BAHAMAS
- NEW WORLD
- AMERICA
- PORTUGAL
- PASSAGE

Teacher's Signature: _____

Remarks: _____

Worksheet 2

A. Fill in the blanks. Choose words from the brackets.

1. Explorers discovered various parts of _____.
(our planet/the space)
2. Christopher Columbus was an _____ explorer. (Italian/Irish)
3. In the year _____, Christopher Columbus set out from Spain to find a sea route to the east. (1492/1482)
4. Vasco da Gama started his voyage from _____.
(Lisbon/Paris)
5. Vasco da Gama first reached the Cape of Good Hope in South _____. (America/Africa)

B. Match the columns.

- | | |
|---------------------------|-----------------------|
| 1. Christopher Columbus ● | ● a. America |
| 2. New World ● | ● b. Italian explorer |
| 3. Vasco da Gama ● | ● c. passage |
| 4. Ferdinand Magellan ● | ● d. Calicut |
| 5. Strait of Magellan ● | ● e. 1519-1521 |

C. Read the clues. Fill in the blanks with the correct answers.

1. We discover new lands. _____
2. I accidentally discovered a new continent. _____
3. I was the first European to reach India by sea. _____
4. I am an Italian explorer. _____
5. The Strait of Magellan was named after me. _____

Teacher's Signature: _____

Remarks: _____

Worksheet 1

A. Match the columns.

- | | | |
|---------------------|---|------------------------|
| 1. Asia | ● | ● a. states |
| 2. 28 | ● | ● b. India's location |
| 3. 8 | ● | ● c. representatives |
| 4. elections | ● | ● d. Governor |
| 5. state government | ● | ● e. Union Territories |

B. Fill in the blanks. Choose options from the brackets.

- India lies in _____. (Asia/South America)
- There are _____ states in India. (28/29)
- India selects its own _____ through the process of elections. (leaders/singers)
- There are _____ layers of the government in India. (two/three)
- The _____ government makes laws for the whole country. (state/central)

C. Complete the table.

State	Capital
Rajasthan	
	Kohima
Maharashtra	
	Kolkata
Kerala	

Teacher's Signature: _____

Remarks: _____

Worksheet 2

A. Write true or false.

1. In terms of land area, Rajasthan is the smallest state.
2. The central government ensures the safety and the welfare of the country's citizens.
3. Each state of India does not elect its own government.
4. The Union Territories are governed by the central government.
5. Port Blair is the capital of Andaman and Nicobar Islands.

B. Look at the map* given below. Answer the following questions.

1. Name the country that lies to the north-western part of India.
P ___ K ___ S ___ A ___
2. Name the capital of the largest state of India in terms of land area.
___ A ___ P ___ R
3. Name a state that lies in central India.
___ A ___ H Y ___ P ___ A ___ E ___ H
4. Name the water body that lies to the southern part of India.
___ N D ___ N O C ___ N
5. Name the state of India whose capital is Bhubaneswar.
O ___ I ___ H ___



C. Find and circle the names of six states in the wordsearch.

Q	M	I	Z	O	R	A	M	O	J
A	T	A	D	E	P	Q	N	F	H
K	S	A	S	S	A	M	R	Y	A
E	W	B	K	A	D	F	V	I	R
R	X	S	I	K	K	I	M	O	K
A	N	Y	C	D	F	N	Q	P	H
L	B	C	H	H	A	U	T	I	A
A	V	K	Q	W	H	D	P	D	N
F	T	X	O	I	V	N	M	V	D
R	A	J	A	S	T	H	A	N	I

- ASSAM
- JHARKHAND
- MIZORAM
- KERALA
- SIKKIM
- RAJASTHAN

*Map not to Scale.

Teacher's Signature: _____

Remarks: _____

Worksheet 1

A. Fill in the missing letters.

1. Basant Panchami marks the beginning of ___ P _____..
2. The festival of N _____ marks the Parsi New Year.
3. Bihu is the harvest festival of ___ S _____.
4. ___ A ___ is the harvest festival of Kerala.
5. ___ T _____ is a dance form of northern India.

B. Match the columns.

- | | | |
|---------------------|---|------------------------|
| 1. Pongal | ● | ● i. National festival |
| 2. Teacher's Day | ● | ● ii. Kerala |
| 3. Independence Day | ● | ● iii. Gujarat |
| 4. Kathakali | ● | ● iv. 5 September |
| 5. Garba | ● | ● v. Tamil Nadu |

C. Find and the circle the names of Indian dance forms in this word search.

S	I	G	I	D	D	H	A	C	F
A	T	A	D	E	P	Q	N	F	K
K	S	R	I	F	D	E	R	Y	A
L	W	B	K	A	D	F	V	I	T
A	X	A	T	O	Z	X	B	O	H
O	N	Y	C	D	F	N	Q	P	A
T	B	C	H	H	A	U	T	I	K
I	D	Z	Q	W	H	D	P	D	A
C	A	X	O	I	V	N	M	V	L
K	A	T	H	A	K	E	V	N	I

KATHAK
GARBA
GIDDHA
KATHAKALI
CHHAU

Teacher's Signature: _____

Remarks: _____

Worksheet 2

A. Find words in the lesson with these meanings.

1. this special feast is prepared on Onam _____
2. festivals celebrated to mark the growing and cutting of crops _____
3. this Indian classical dance form evolved from a dance practised in temples _____
4. the two kinds of Indian dance forms _____
5. a popular folk dance form of Gujarat _____

B. Answer these questions.

1. Write the names of any two harvest festivals of India.

2. Write the names of any two Indian classical dance forms.

3. Why do we celebrate national festivals?

4. How do we celebrate Raksha Bandhan?

5. How is Garba performed in Gujarat?

C. Circle the Indian folk dance forms.



Teacher's Signature: _____

Remarks: _____

Worksheet 1

A. Find and circle the names of different means of communication in the word search.

S	N	E	W	S	P	A	P	E	R	G	Z
A	T	W	D	E	P	Q	N	M	A	T	F
N	S	U	I	C	A	E	R	A	C	E	Q
L	W	G	S	A	D	F	V	I	I	L	T
A	X	B	T	O	Z	X	B	L	F	E	L
N	N	Y	C	D	F	N	P	A	I	P	B
T	M	A	G	A	Z	I	N	E	C	H	V
I	D	Z	Q	W	H	D	P	D	E	O	S
C	A	X	O	I	V	N	M	V	D	N	M
I	N	L	A	N	D	L	E	T	T	E	R

- TELEPHONE
- INLAND LETTER
- MAGAZINE
- EMAIL
- NEWSPAPER

B. Fill in the blanks.

- The sending and receiving of _____ is known as communication.
- _____ is used in case of faster delivery of letters and parcels.
- A _____ is the fastest means of communication.
- A _____ machine is connected to a telephone line.
- Newspapers and radio are examples of _____ communication.

C. Look at the picture. Answer the questions.

- Write any two uses of smartphones.
- How do you read newspapers, magazines and books on a smartphone?



Teacher's Signature: _____

Remarks: _____

Worksheet 2

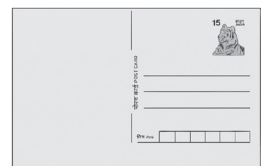
A. Answer these questions.

1. What is communication?
2. Name the two types of communication.
3. Write the full form of SMS.
4. What is an email?
5. What is mass communication?

B. Match the columns.

- | | | |
|-----------------------------|---|----------------------------|
| 1. Signs and sounds | ● | ● i. Telephone line |
| 2. India Post | ● | ● ii. Mass communication |
| 3. Smartphone | ● | ● iii. Early humans |
| 4. Fax machine | ● | ● iv. Mini-computer |
| 5. Newspapers and magazines | ● | ● v. Indian postal service |

C. Circle the means of personal communication.



Teacher's Signature: _____

Remarks: _____

Worksheet 1

A. Write true or false.

1. There are three types of means of transport. _____
2. Road is a type of land transport. _____
3. Trains move on road. _____
4. Bullock carts are commonly used in cities. _____
5. An aeroplane is a very fast means of transport. _____

B. Find and circle the names of five means of transport in the wordsearch.

S	C	M	O	T	E	R	E	A	A
R	B	O	A	T	S	F	E	V	E
I	E	T	C	R	O	R	U	Z	R
X	A	O	B	A	O	T	T	B	O
Y	C	R	O	I	C	C	B	I	P
S	J	C	L	N	R	L	K	C	L
K	F	Y	Y	Q	C	B	E	Y	A
U	N	C	H	I	P	S	S	C	N
E	R	L	Y	F	P	A	S	L	E
S	T	E	A	M	E	R	N	E	L

- MOTORCYCLE
- TRAIN
- AEROPLANE
- STEAMER
- BOAT

C. Write L for land transport. Write W for water transport. Write A for air transport.

1. Bus: _____
2. Truck: _____
3. Ship: _____
4. Helicopter: _____
5. Bicycle: _____

Teacher's Signature: _____

Remarks: _____

Worksheet 2

A. Unscramble the letters to complete the sentences.

1. People RATVEL everyday for work, education and so on.
2. Land, air and ATWER are the three means of transport.
3. RAINST run on railway tracks.
4. Bullock carts are commonly used in LLIVAGES.
5. A COPTERHELL carries a few people.

B. Look at the pictures. Name the vehicles.

1.



2.



3.



4.



5.



C. Write true or false.

1. Camels pull carts and carry people in deserts.
2. Elephants are used in forests.
3. Aeroplanes can carry only a few people.
4. Early humans used rafts to travel on water.
5. One should always walk on the footpath.

Teacher's Signature: _____

Remarks: _____

Worksheet 1

A. Fill in the blanks.

1. Resting and relaxing in one's free time is called _____ .
2. Cricket is an _____ game.
3. Badminton is a sport played between two to _____ players.
4. Golf is played with a _____ and a ball.
5. Hide-and-seek is an _____ game.

B. Write true or false.

1. Games periods help us relax between classes. _____
2. Hopscotch is an outdoor game. _____
3. Neeraj Chopra is associated with golf. _____
4. A football team has 9 members. _____
5. Five stones is a traditional board game. _____

C. Find and circle the odd one out.

- | | | |
|--------------------------|------------------------|-----------------|
| 1. racket | ball | shuttlecock |
| 2. club | ball | spinning top |
| 3. <i>gilli</i> | <i>danda</i> | marbles |
| 4. Neeraj Chopra | Sunil Chhetri | APJ Abdul Kalam |
| 5. <i>Babushka</i> dolls | <i>Thanjavur</i> dolls | Ludo |

Teacher's Signature: _____

Remarks: _____

Worksheet 2

A. Find and circle the names of five games/sports in the wordsearch.

F	K	W	O	Z	E	R	E	S	F
O	M	I	C	T	S	F	M	V	T
O	E	D	A	H	O	R	U	Z	N
T	A	T	R	Y	O	T	T	B	U
B	C	G	O	L	F	C	B	I	L
A	J	C	M	O	R	L	K	C	K
L	F	A	Y	Q	C	B	E	Y	J
L	N	S	H	P	I	T	T	H	U
E	R	F	Y	F	P	A	S	L	Q
Q	W	R	E	S	T	L	I	N	G

- FOOTBALL
- WRESTLING
- PITTHU
- GOLF
- CAROM

B. Look at the picture. Answer the following questions.

1. Which game is being played here?

2. Write two lines about this game.



C. Write I for indoor game. Write O for outdoor game.

1. Cricket: _____

2. Carom: _____

3. Chaupar: _____

4. Hopscotch: _____

5. Kho-kho: _____

Teacher's Signature: _____

Remarks: _____

Worksheet 1

A. Fill in the blanks.

1. _____ events that harm living beings and property are called natural disasters.
2. An earthquake is a _____ disaster.
3. During an earthquake people must move to an _____ area.
4. Floods occur mostly when _____ overflow after heavy _____.
5. During floods, vehicles and houses _____.

B. Look at the picture. Answer the following questions.



1. Name the natural disaster:

2. Name the steps that one must take if trapped inside a building during this natural disaster.

C. Answer the following.

- | | |
|--------------------------------|---------------------------|
| 1. What is a natural disaster? | 2. What is an earthquake? |
| 3. What is a flood? | 4. What is a tsunami? |
| 5. What is a drought? | |

Teacher's Signature: _____

Remarks: _____

Worksheet 2

A. Unscramble the letters to name the natural disasters.

1. QUAKEARTH: _____
2. DSFLOO: _____
3. LONECYC: _____
4. NAMITSU: _____
5. GHTDROU: _____

B. Write Y if it is a natural disaster. Write N if it is not a natural disaster.

1. Power cut: _____
2. Earthquake: _____
3. Breeze: _____
4. Floods: _____
5. Drought: _____

C. List five things you should put in your first-aid kit.

Teacher's Signature: _____

Remarks: _____