


# ICSE Geography

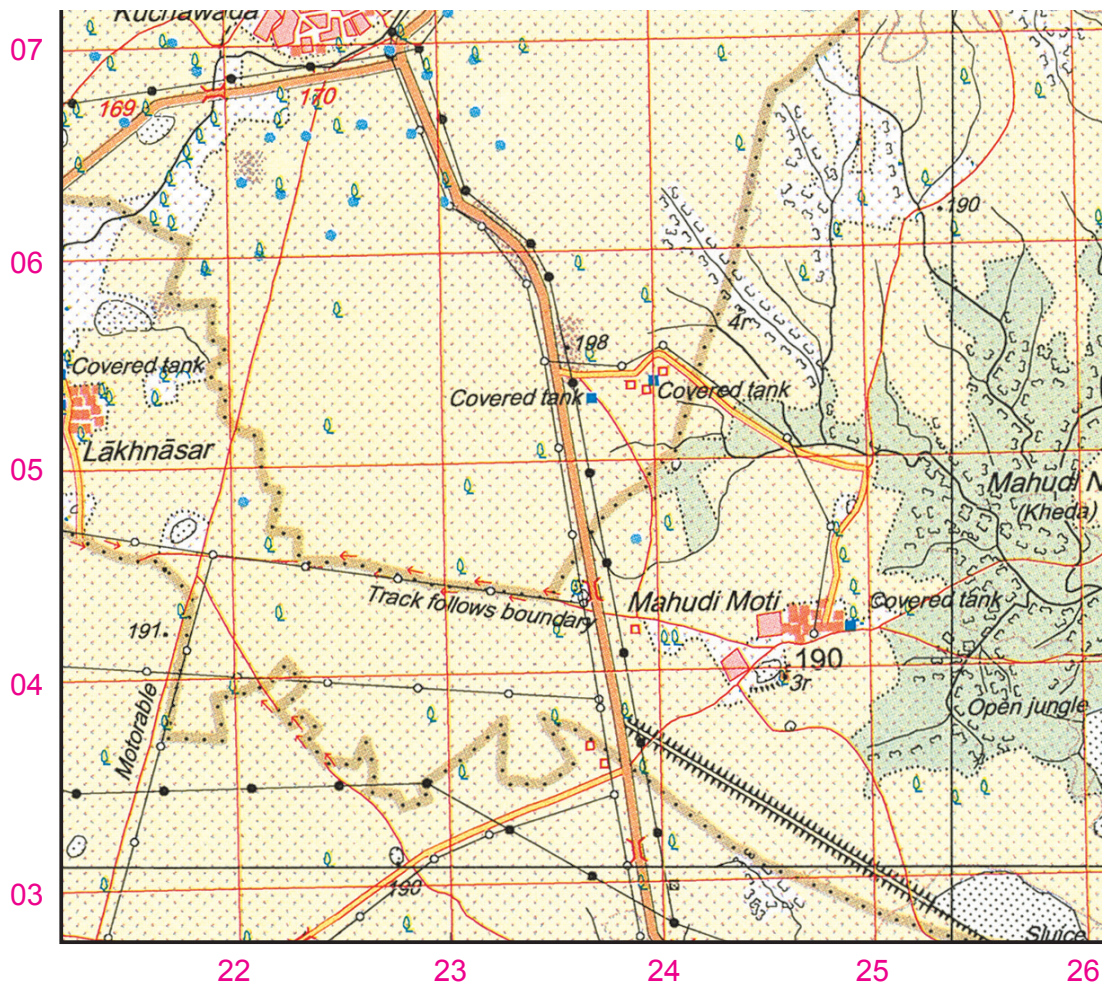
## Class 10



## Multiple-Choice Questions

### CHAPTER 2: Study of Topographical Sheet No. G43S7

For questions 1 and 2 refer to the map extract given below.



1. What type of height does 191 represents?
  - a. Spot height of 191 m
  - b. Spot height of 191 feet
  - c. Spot height of 191 cm
  - d. Spot height of 191 km

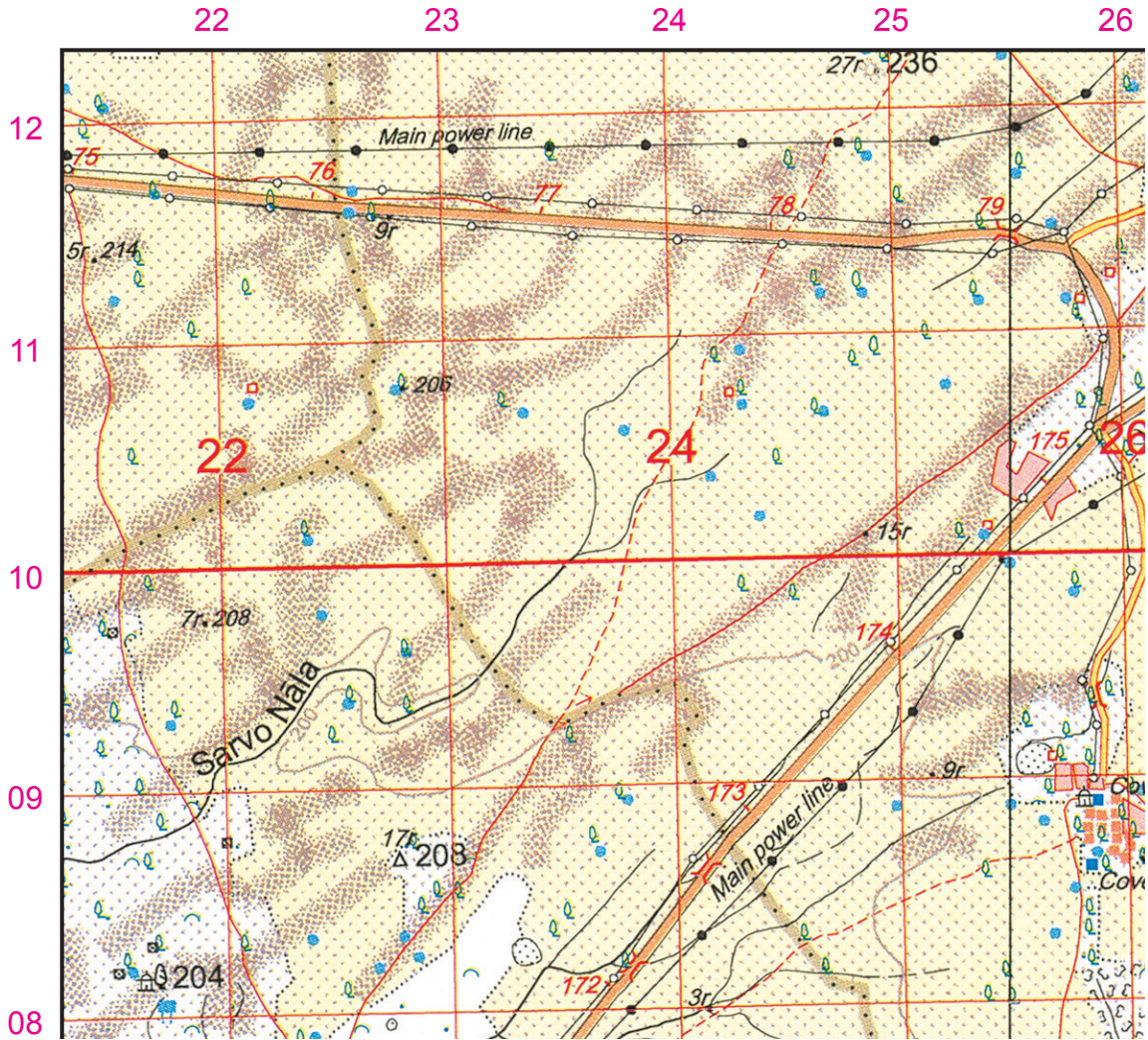
Answer: (a) Spot height of 191 m



2. Contour lines are defined as
  - a. lines joining places of equal altitude.
  - b. lines joining places having same temperature.
  - c. lines joining places having same atmospheric pressure.
  - d. lines joining places of remote areas.

Answer: (a) lines joining places of equal altitude.

For questions 3, 4 and 5 refer to the map extract given below.



3. What is the general direction of the flow of stream Sarvo Nala?
  - a. South-West
  - b. North-West
  - c. South-East
  - d. North-East

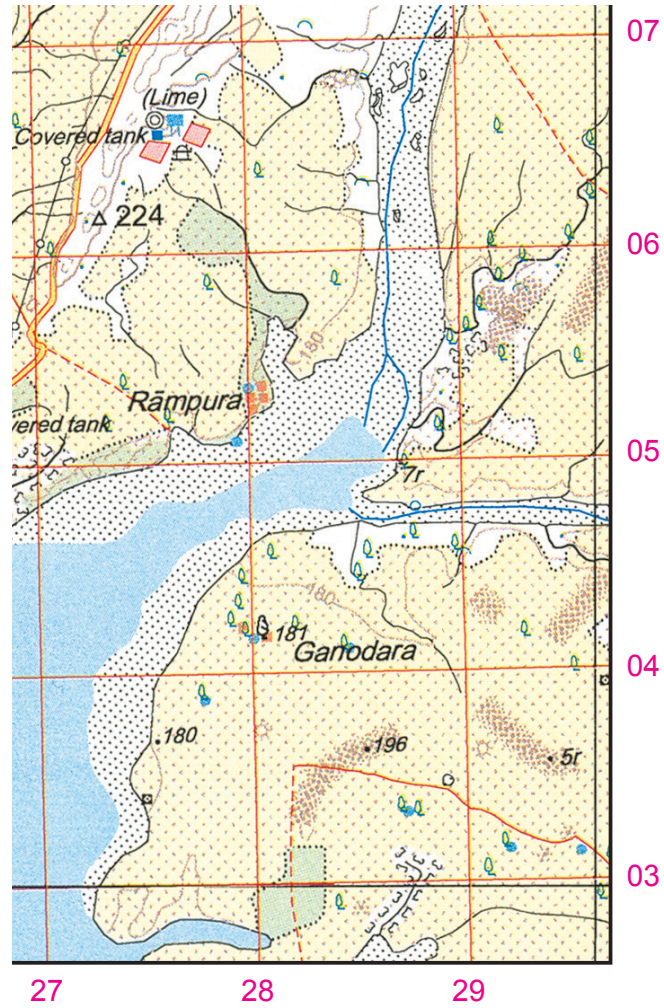
Answer: (a) South-West
4. A blue dot symbolizes an/a
  - a. unlined well.
  - b. a tubewell.
  - c. a tank.
  - d. a lined perennial well.

Answer: (d) a lined perennial well.

5. What do the brown patches in the North-Western corner of the map indicate?
  - a. Form lines
  - b. Contour lines
  - c. Sand dunes
  - d. Barren land

Answer: (c) Sand dunes

For questions 6 and 7 refer to the map extract given below.



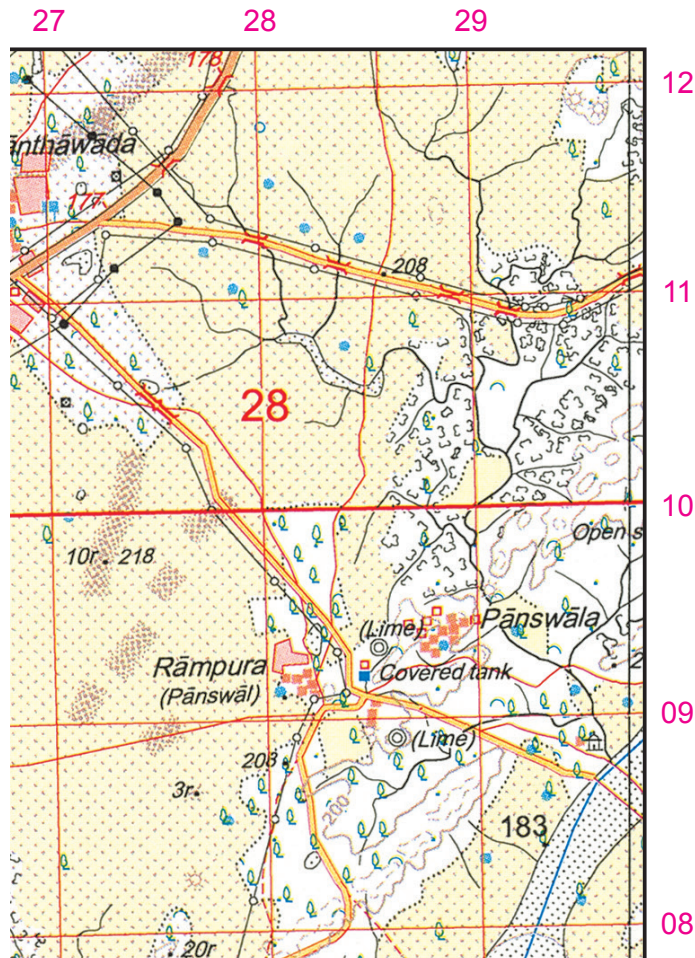
6. Which area of the map has the least settlement?
- South-Western area
  - North-Western area
  - South-Eastern area
  - North-Eastern area
7. The meaning of 5r in grid square 2903 is the
- relative height of a sand dune is 5 m.
  - relative height of a sand dune is 5 m above sea level.
  - relative height of a cultivable land.
  - all of the above.

Answer: (c) South-Eastern area

Answer: (a) relative height of a sand dune is 5 m.



For questions 8, 9 and 10 refer to the map extract given below.



8. The red line which is running through north of Santawada denotes
- |                   |                     |
|-------------------|---------------------|
| a. metalled road. | b. unmetalled road. |
| c. pack track.    | d. cart track.      |
- Answer: (d) cart track.

9. The type of tanks seen in the map extract is
- |                                       |                      |
|---------------------------------------|----------------------|
| a. a seasonal tank.                   | b. a perennial tank. |
| c. both perennial and seasonal tanks. | d. none of these.    |
- Answer: (c) both perennial and seasonal tanks.

10. The presence of black dots in the river bed represents
- |            |               |
|------------|---------------|
| a. rocks.  | b. pebbles.   |
| c. stones. | d. sediments. |
- Answer: (d) sediments.