


ICSE Geography

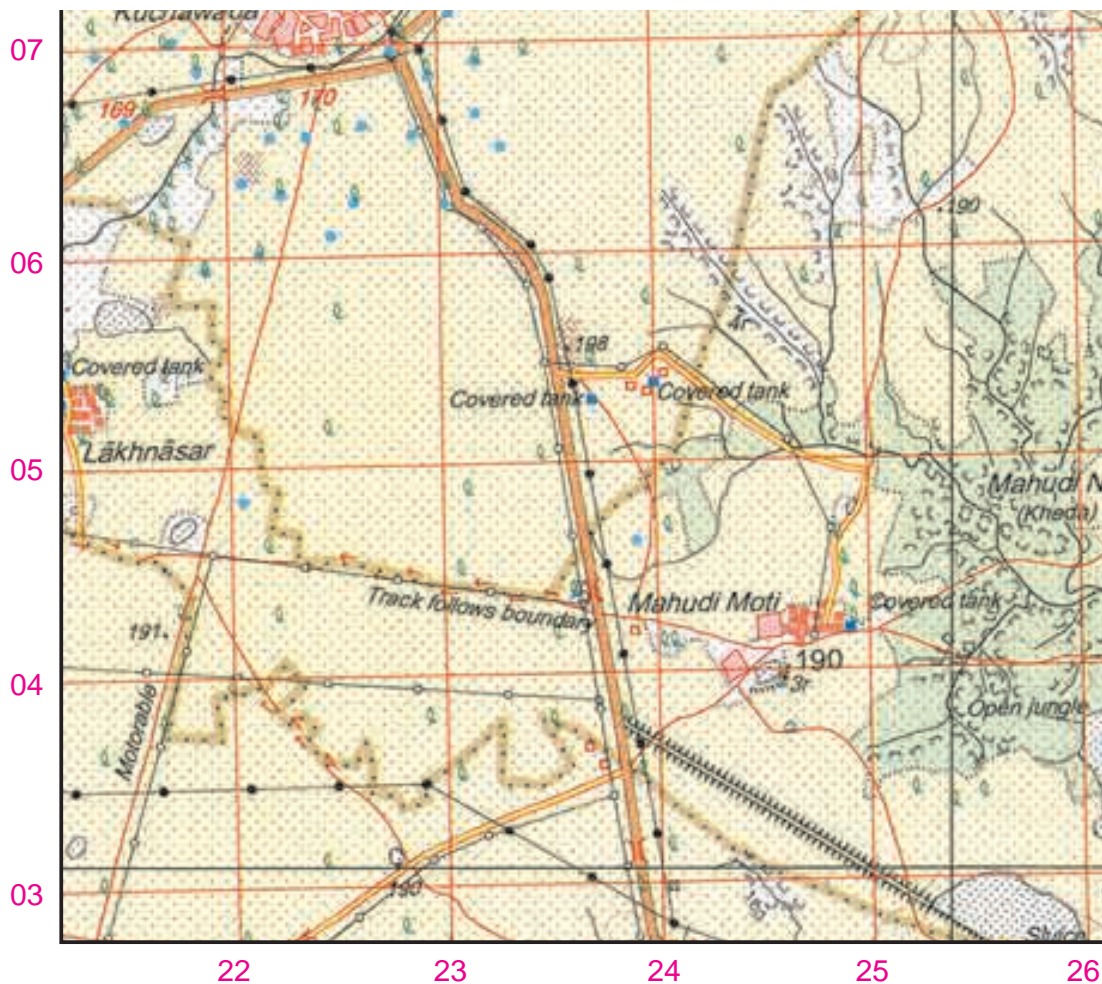
Class 10



Multiple-Choice Questions

CHAPTER 2: STUDY OF TOPOGRAPHICAL SHEET NO. G43S7

For questions 1 and 2 refer to the map extract given below.



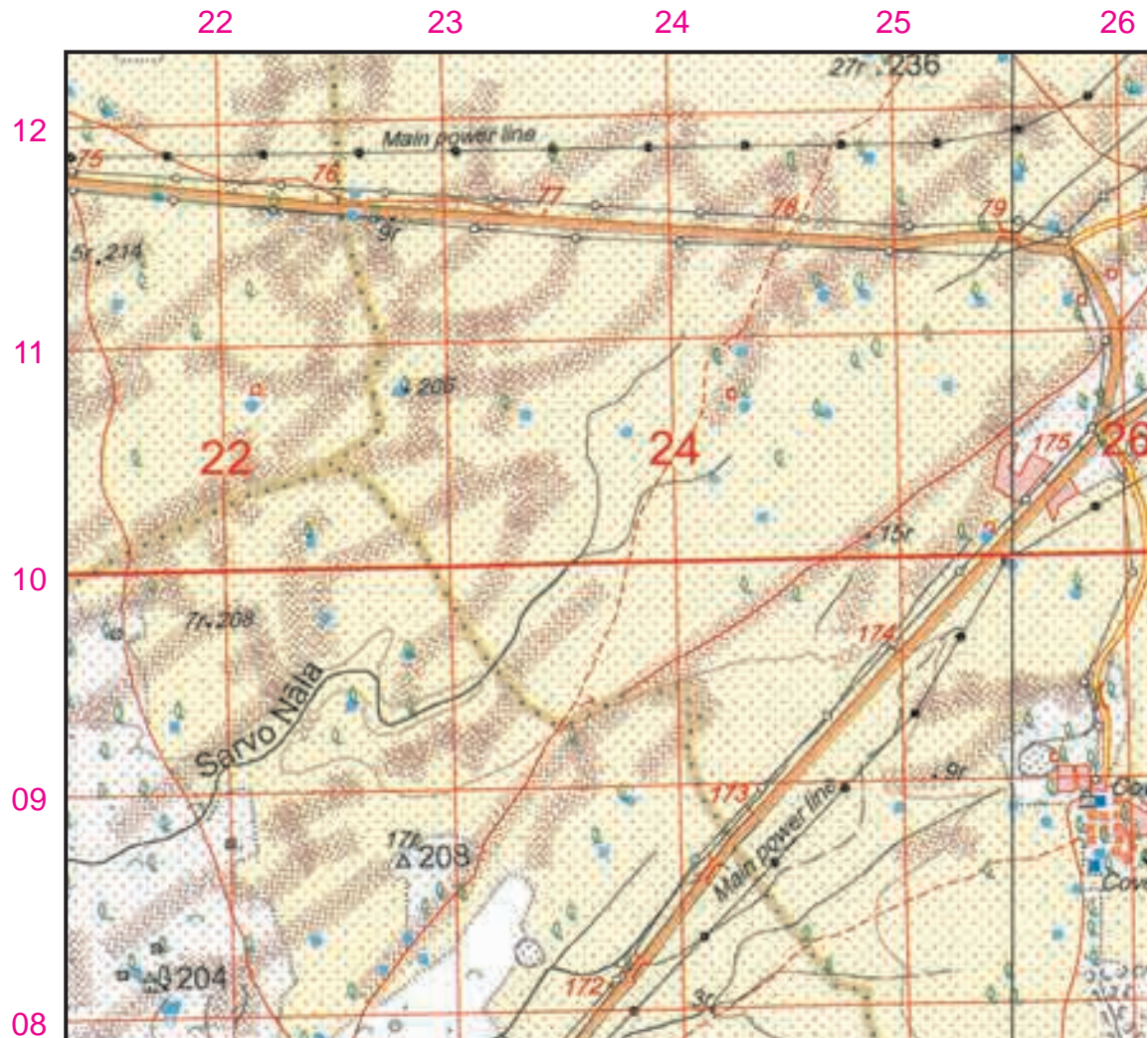
1. What type of height does 191 represents?
- a. Spot height of 191 m
 - b. Spot height of 191 feet
 - c. Spot height of 191 cm
 - d. Spot height of 191 km

Answer: (a) Spot height of 191 m

2. Contour lines are defined as
 - a. lines joining places of equal altitude.
 - b. lines joining places having same temperature.
 - c. lines joining places having same atmospheric pressure.
 - d. lines joining places of remote areas.

Answer: (a) lines joining places of equal altitude

For questions 3, 4 and 5 refer to the map extract given below.



3. What is the general direction of the flow of stream Sarvo Nala?
 - a. South-West
 - b. North-West
 - c. South-East
 - d. North-East

Answer: (a) South-West
4. A blue dot symbolizes an/a
 - a. unlined well.
 - b. a tubewell.
 - c. a tank.
 - d. a lined perennial well.

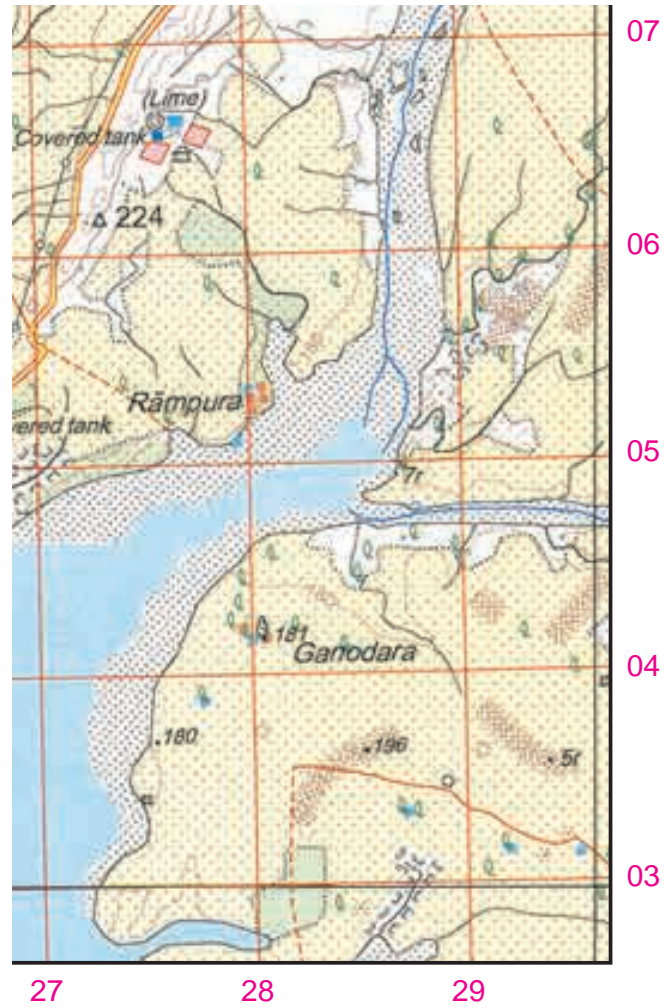
Answer: (d) a lined perennial well.

5. What do the brown patches in the North-Western corner of the map indicate?

- a. Form Lines
 - b. Contour Lines
 - c. Sand dunes
 - d. Barren Land

Answer: (c) Sand Dunes

For questions 6 and 7 refer to the map extract given below.

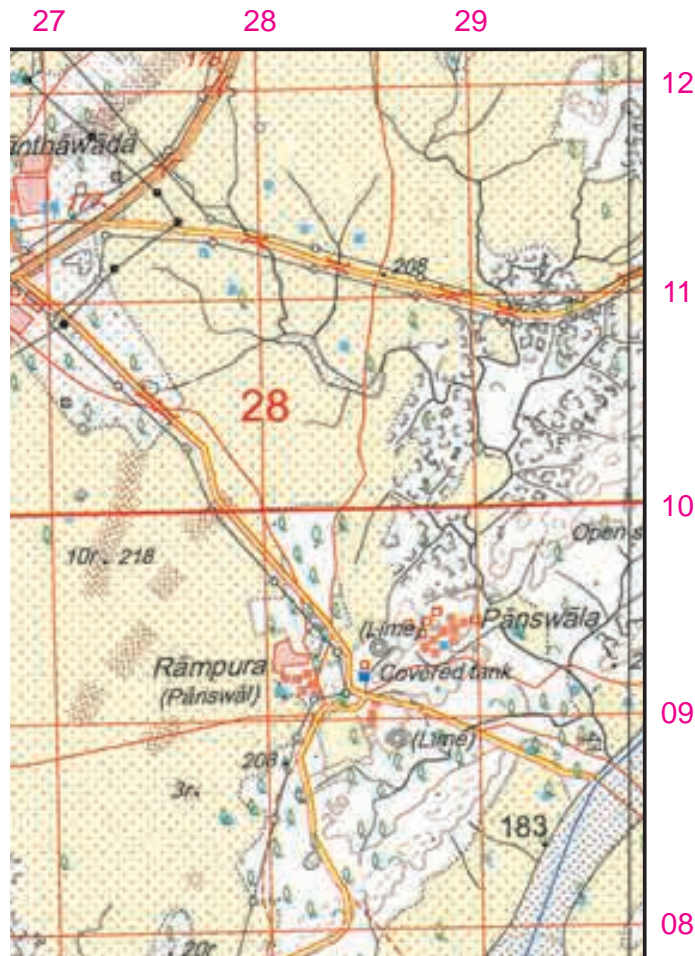


6. Which area of the map has the least settlement?
- South-Western area
 - North-Western area
 - South-Eastern area
 - North-Eastern area
7. The meaning of 5r in grid square 2903 is the
- relative height of a sand dune is 5m.
 - relative height of a sand dune is 5m above sea level.
 - relative height of a cultivable land.
 - all of the above.

Answer: (c) South-Eastern area

Answer: (a) relative height of a sand dune is 5m.

For questions 8, 9 and 10 refer to the map extract given below.



8. The red line which is running through north of Santawada denotes
- a. metalled road.
 - b. unmetalled road.
 - c. pack track.
 - d. cart track.
- Answer: (d) cart track.
9. The type of tanks seen in the map extract is
- a. a seasonal tank.
 - b. a perennial tank.
 - c. both perennial and seasonal tanks.
 - d. none of the above.
- Answer: (c) both perennial tank and seasonal tank
10. The presence of black dots in the river bed represents
- a. rocks.
 - b. pebbles.
 - c. stones.
 - d. sediments.
- Answer: (d) sediments